

第七单元 达标测试卷

时间:90 分钟














满分:100 分

题号	一	二	三	四	五	六	七	总分	智慧园
得分									

hòu miàn yí gè tú xíng yīng gāi shì shén me bǎ zhèng què de quān qǐ lái

一、后面一个图形应该是什么?把正确的圈起来。(10 分)

1.         _____ ( )

2.            _____ ( )

3.        _____ ( )







4.       _____ (  )








5.          _____ ( )

wǒ shì xiǎo huà jiā

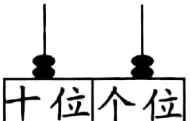
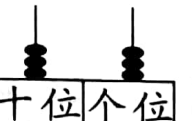
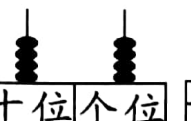

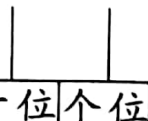
二、我是小画家。(24 分)

1. 找规律,画一画。(10 分)

①       _____

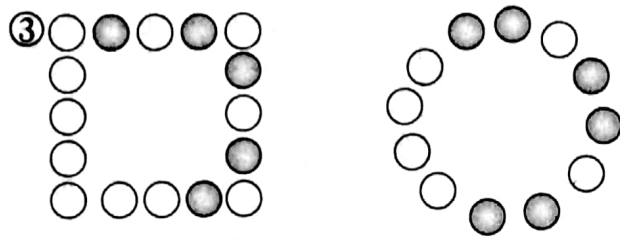
②        _____

③         _____


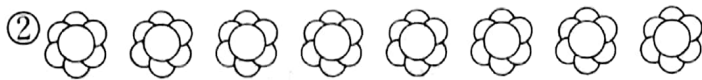
④      _____

2. 按规律接着涂一涂。(8 分)

①        

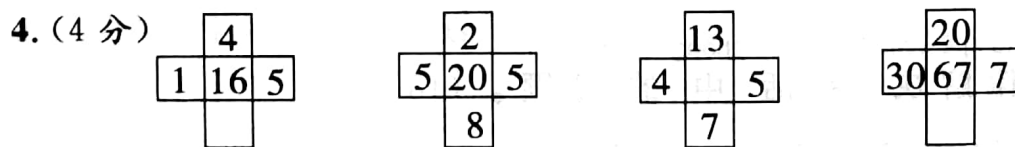
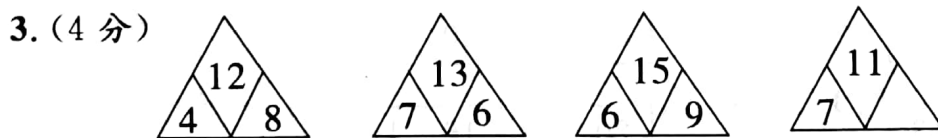
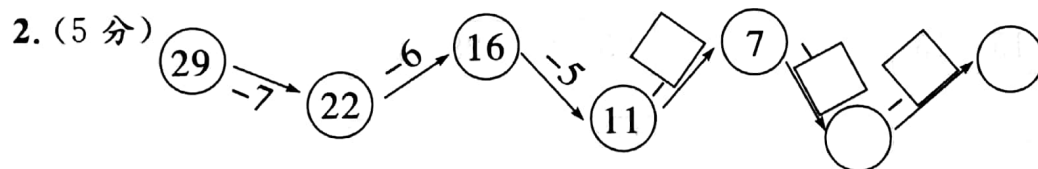
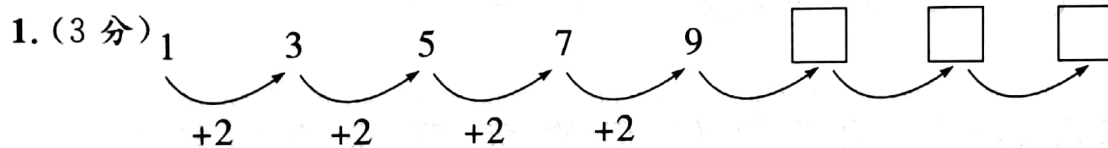


3. 有规律的涂色。(6分)

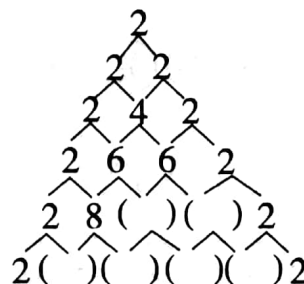
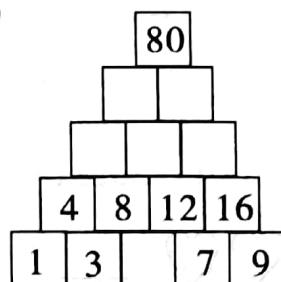


zhǎo guī lǜ tián yì tián

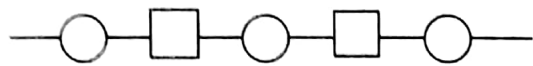
三、找规律，填一填。(28分)



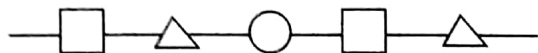
5. (12分)



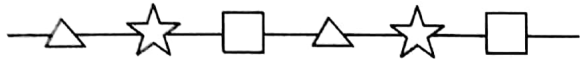
四、这几串项链分别是谁穿的？(连一连)(6分)



我再接着穿△。



我应该接着穿□。

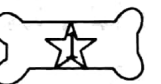
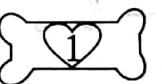
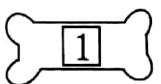
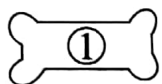
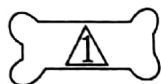


我接着穿○。



gè qù diào yí gè ràng xiǎo dòng wù men de shí wù pái liè de yǒu guī lǜ

五、各去掉一个，让小动物们的食物排列得有规律。(6分)



qǐng bǎ zuǒ yòu liǎng biān guī lǜ xiāng tóng de liǎng zhāng kǎ piàn lián qǐ lái

六、请把左、右两边规律相同的两张卡片连起来。(8分)

15 15 15 15

28 28 28 28

5 10 15 20

10 9 8 7

9 7 5 3

30 35 40 45

16 15 14 13

20 18 16 14

yùn yòng guī lǜ jiě jué shēng huó zhōng de wèn tí

七、运用规律解决生活中的问题。(18分)

1. 哪两行的规律相同？在后面的横线上画“√”。(6分)

笑哈哈笑哈哈笑哈哈笑哈哈

□□△△□□△△□□△△

😊❤️😊❤️😊❤️😊❤️😊❤️😊❤️😊❤️😊❤️

2. 哪一行的规律与其他三行的不一样,画“×”。(4 分)

(1) 3, 4, 5, 6 ()

(2) 1, 3, 5, 7 ()

7, 8, 9, 10 ()


2, 5, 7, 9 ()

1, 3, 2, 3 ()

2, 4, 6, 8 ()

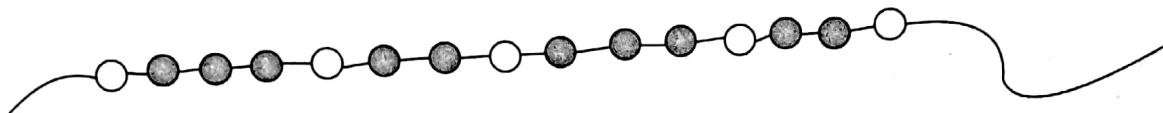
1, 2, 3, 4 ()

5, 7, 9, 11 ()

3.  (4 分)

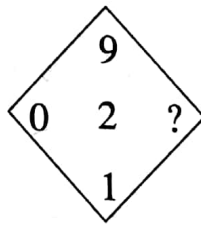
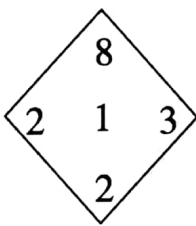
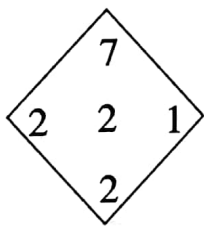
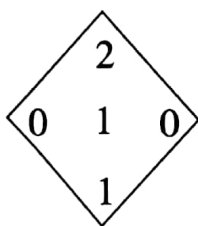
箱子里有()个○, ()个●

4. 按规律接着再画 8 颗, 倒数第三颗是()色, 最后一颗是()色。(4 分)










智慧园

问号处按规律应填几?(10 分)





第七单元

一、1.  2.  3.  4.  5. 

二、1. ①.  

②.  

③.    

④.    

十位	个位	十位	个位
----	----	----	----

2. 略 3. 略

三、1. 11 13 15

2.

-4

-3

4

-2


2

3. 4 4. 6 29 10

5.

			80	
		32	48	
	12	20	28	
4	8	12	16	
1	3	5	7	9

	12	8	
10	20	20	10

四、

五、38 50

六、

七、1. 略 2. 略 3. 9 4

4. 黑 黑

智慧园:6